


# Year 5 – Set One

Name ..... Date .....

**1**



The shaded area on this grid, in square units, is closest to

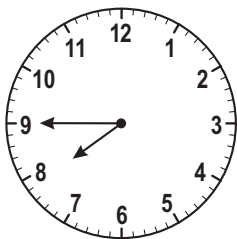
- 15                      18                      20                      21
- 

**2**

What is the next number in this pattern?

630, 760, 890,

**3**



The time on this clock is the same as

- 7:15                      7:45                      8:40                      8:45
- 

**4**

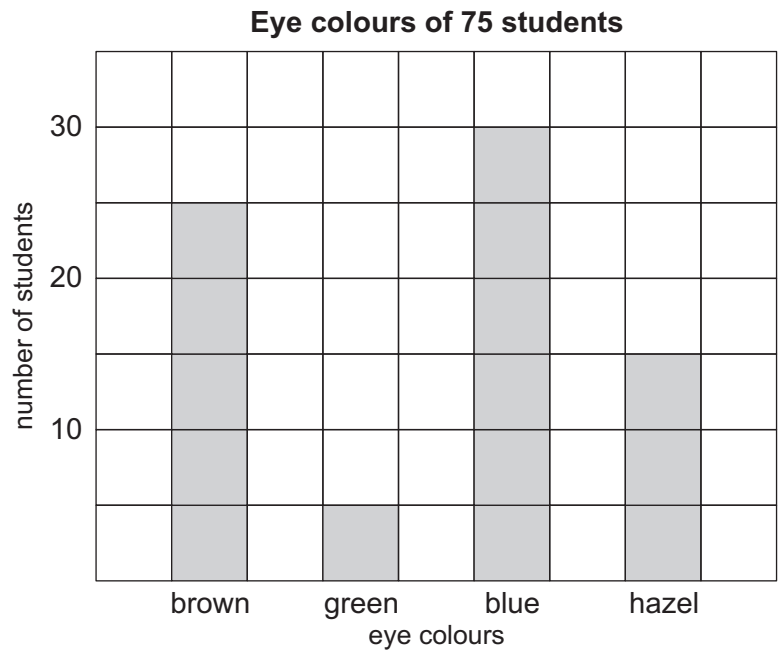
**$9632 \div 8 =$**

- 124                      179                      1079                      1204
-

**5**

The eye colours of 75 students were recorded.

This graph shows the results.



Which statement is true?

- Half the students had blue eyes.
- Twice as many students had blue eyes as had hazel eyes.
- More students had hazel or green eyes than had brown eyes.
- Five times as many students had blue eyes as had green eyes.

**6**

Sara buys a loaf of bread which costs \$3.65. She pays with a \$5 note.

How much change should Sara get?

- 35 cents
- 45 cents
- \$1.35
- \$1.45

**7**

What is the missing number?

$6 \times \boxed{\phantom{00}} = 3 \times 10$

**8**

Which of these numbers is worth the least in value?

- 0.24
- 2.04
- 2
- 0.4